

USN

--	--	--	--	--	--	--	--	--	--

09ENG4.5

**Fourth Semester B.Arch. Degree Examination, June/July 2018**  
**Structures – IV**

Time: 3 hrs.

Max. Marks:100

**Note: 1. Answer any FIVE full questions.**

- 1 Analyse the propped Cantilever shown in Fig Q1 and draw SFD and BMD. (20 Marks)

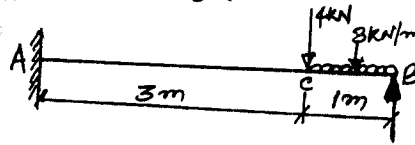


Fig Q1

- 2 Analyse the fixed beam shown in Fig Q2 and draw SFD and BMD. (20 Marks)

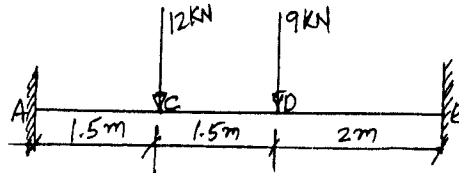


Fig Q2

- 3 Draw SFD and BMD for the fixed beam shown in Fig Q3. (20 Marks)




Fig Q3

- 4 Analyse the continuous beam shown in Fig Q4 by Clapeyron's theorem of three moments and draw SFD and BMD. EI is constant. (20 Marks)

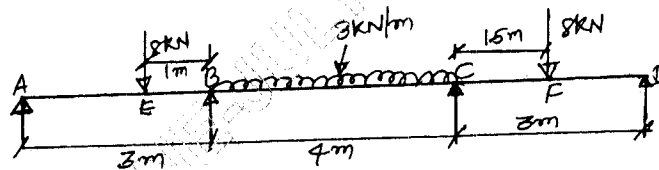


Fig Q4

- 5 Analyse the continuous beam shown in Fig Q5 by three moment equation and draw SFD and BMD. (20 Marks)




Fig Q5

- 6 Analyse the continuous beam shown in Fig Q6 by moment distribution method EI is constant. Draw BMD. (20 Marks)

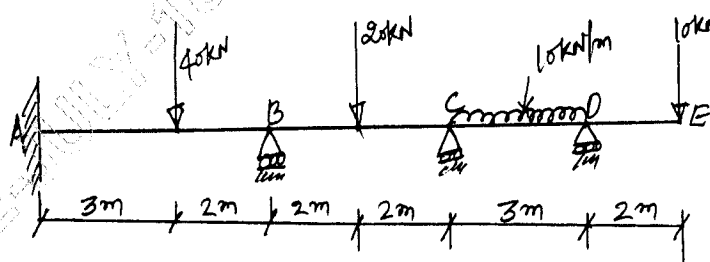


Fig Q6

- 7 Analyse the portal frame shown in Fig Q7 moment distribution method and draw BMD

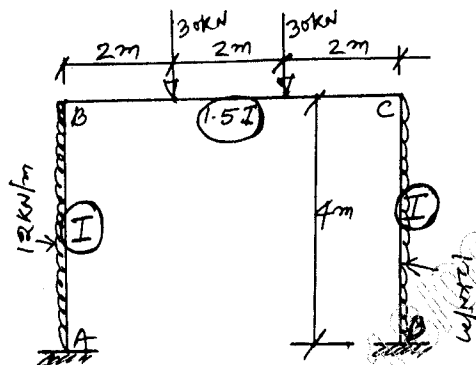


Fig Q7

(20 Marks)

- 8 Analyse the continuous beam shown in Fig Q8 by moment distribution method and draw SFD. (20 Marks)

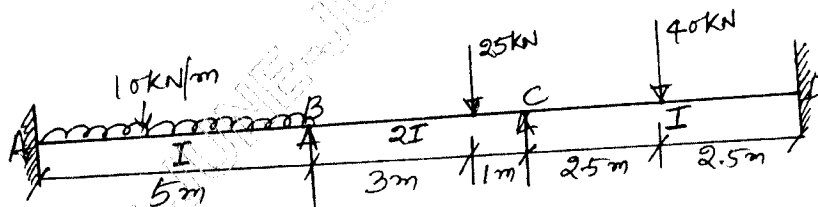


Fig Q8

\*\*\*\*\*